

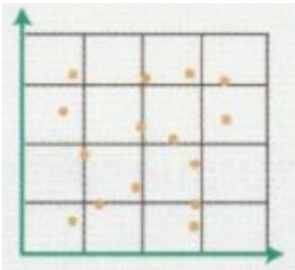
W4. Finding the Relationship of a Dataset

1. What is a dataset?

2. Explain what is the direction of a relationship.

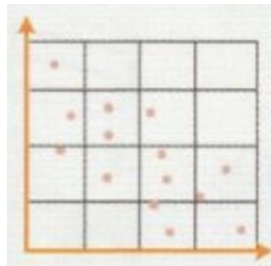
3. Explain what is a degree of a relationship.

4. What is the direction and degree of these three relationships?



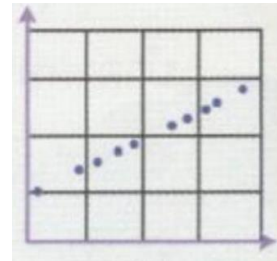
Direction:

Degree:



Direction:

Degree:



Direction:

Degree: